

KENDRIYA VIDYALAYA KEYLONG  
SUMMER VACATION'S ASSIGNMENTS



MATHS

CLASS: 4<sup>TH</sup>

**INSTRUCTIONS:**



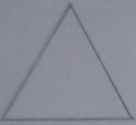
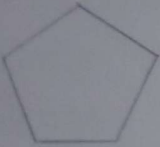
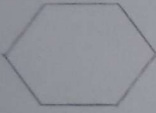
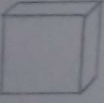

- a. Project should be done in the scrap book.
- b. Tables should be written in the scrap book only.
- c. Assignment should be done in the scrap book.

1. **Project:** Find these following objects at your home and measure their dimensions with the help of a ruler. And then draw their pictures in a scrap book and write their measurements in centimetres.

- Maths book
- Television remote control
- Mobile phone
- A pen
- A bottle
- A glass
- A spoon
- A cup
- Your tooth brush
- Your handkerchief

2. Learn and write the tables from 0 to 15, once in normal order and then in reverse order.
3. Make a cube and a cuboid using card board or hard box. Decorate it and colour it.
4. **Assignment:** The following assignment is given to you from chapter one and two of your book MATH MAGIC.

Q1. Write the names of the following shapes:

- 
- 
- 
- 
- 
- 
- 

---

---

---

---


---

---

---

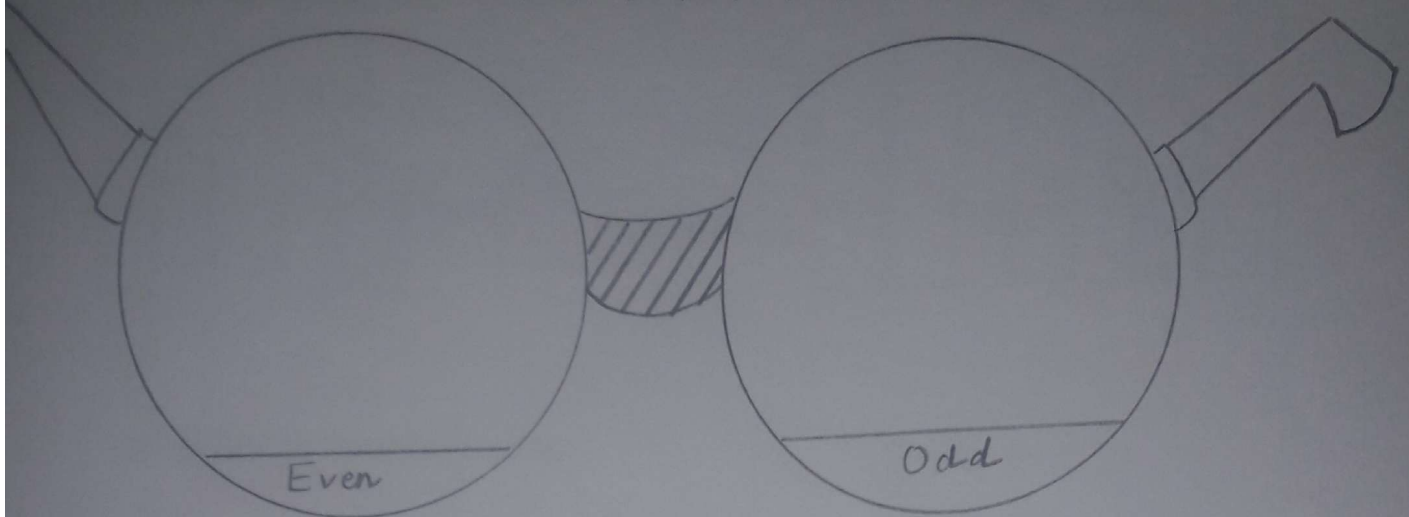
---

Q2. Identify the number of faces, corners, and edges of the given figure.



Q3. Identify even and odd numbers and write them in the appropriate space.

2,4,7,5,9,6,15,10,56,47,24,29,87,65,43,26,71,72,83,92,99,66,13.



Q4. Write the greatest and smallest six digit numbers.

Q5. Write the number name of the following numerals:

- a. 16,92,456
- b. 25,63,476
- c. 6,66,64,986
- d. 99,90,999
- e. 4,10,00,507
- f. 58,46,100
- g. 35,47,098
- h. 87,93,001
- i. 76,47,891
- j. 2,91,98,547

Q6. Write the numerals of the following number name:

- I. Three crore eight lakh six hundred forty two
- II. Three lakh nine thousand Nine hundred ninety nine
- III. Two lakh seven hundred sixty three
- IV. Eight crore ninety lakh one hundred eleven

v. Forty lakh seventy thousand three hundred twelve

Q7. Add the following:

L	TTh	Th	H	T	O
5	8	9	9	8	1
			3	5	2
				2	7

TL	L	TTh	Th	H	T	O	
8	7	4	5	2	3	0	
				7	6	2	
				+	1	4	7

Q8. Subtract the following:

C	TL	L	TTh	Th	H	T	O
	9	0	1	2	3	4	2
-	5	0	1	1	1	3	1

C	TL	L	TTh	Th	H	T	O
	8	8	8	8	8	8	8
-		6	6	6	6	6	6

Q9. Convert metres into centimetres:

- a) 4ms = \_\_\_\_\_ cms
- b) 9ms = \_\_\_\_\_ cms
- c) 10ms = \_\_\_\_\_ cms
- d) 6ms = \_\_\_\_\_ cms

Q10. Convert centimetres into metres:

- a) 700cms = \_\_\_\_\_ ms
- b) 1000cms = \_\_\_\_\_ ms
- c) 450cms = \_\_\_\_\_ ms
- d) 650cms = \_\_\_\_\_ ms